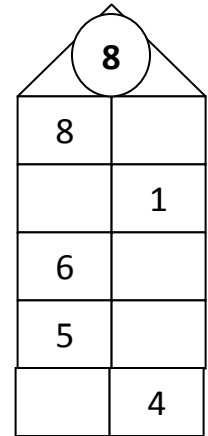
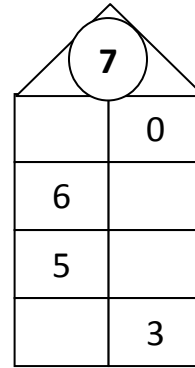
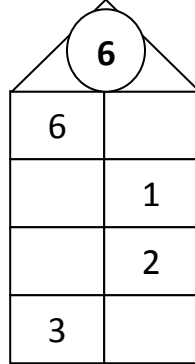
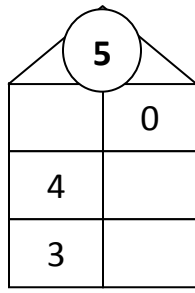
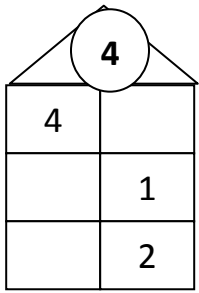


Κάνε τις ασκήσεις στο τετράδιό σου.

1. Συμπλήρωσε τα σπιτάκια των αριθμών.



2. Βρες την απάντηση.

$2 + 2 = \square$

$6 - 1 = \square$

$4 + \square = 5$

$6 - 2 = \square$

$1 + 3 = \square$

$4 - 2 = \square$

$3 + \square = 6$

$4 - 1 = \square$

$2 + 3 = \square$

$7 - 4 = \square$

$2 + \square = 2$

$3 - 0 = \square$

$6 + 2 = \square$

$5 - 3 = \square$

$3 + \square = 7$

$8 - 2 = \square$

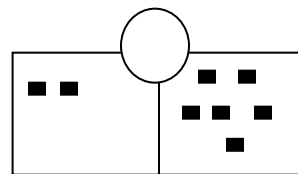
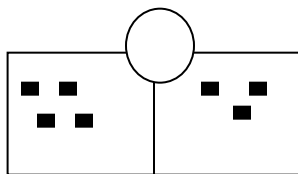
$4 + 3 = \square$

$8 - 4 = \square$

$4 + \square = 8$

$7 - 7 = \square$

3. Φτιάξε 4 μαθηματικές προτάσεις με τους αριθμούς:



$\underline{\quad} + \underline{\quad} = \underline{\quad}$

$\underline{\quad} + \underline{\quad} = \underline{\quad}$

$\underline{\quad} + \underline{\quad} = \underline{\quad}$

$\underline{\quad} + \underline{\quad} = \underline{\quad}$

$\underline{\quad} - \underline{\quad} = \underline{\quad}$

$\underline{\quad} - \underline{\quad} = \underline{\quad}$

$\underline{\quad} - \underline{\quad} = \underline{\quad}$

$\underline{\quad} - \underline{\quad} = \underline{\quad}$